


Tommy says that when he adds two odd numbers together, his total will be even.

Is he correct?  
Convince me.



What else can you find out?

Whitney says,

I have added two one-digit numbers. My answer divides into 2 equal groups.










What could Whitney's numbers be?

Is this the only possible answer?

Which numbers would not be possible?

Explain your answers.

Spot the mistakes:

odd		even	
nine	 1	 10	
6	 3	eight	
		25	

Can you make your own odd and even sets?