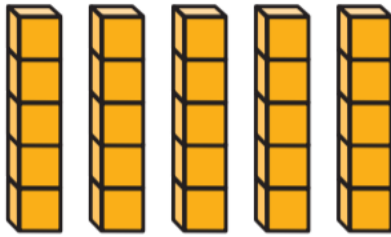


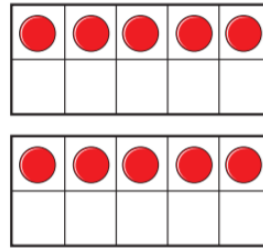
1. For each picture, write the multiplication sentence in your book and draw the matching array.



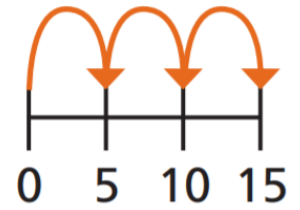
a



b



c



d

2. Write these in your book and complete the missing numbers:

a) $5 \times 5 = \square$


c) $5 \times 6 = \square$

b) $\square = 9 \times 5$

d) $5 \times \square = 40$


3. Write these in your book and write $<$, $>$ or $=$ to complete each one.

7×5



5×8

6×5




$4 \times 5 + 2 \times 5$

2×5



$3 \times 5 - 1 \times 5$

12×2



2×12